


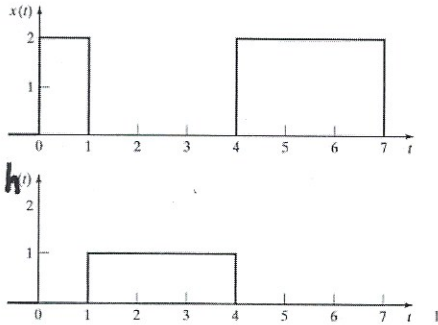
EE103 Quiz 2 October 16, 2017

Name: \_\_\_\_\_ ID: \_\_\_\_\_

This Quiz is to test your knowledge on signal synthesis and convolution with a impulse response.


Let  $x_1(t) = x(t-2) [u(t) - u(t-4)]$

(a) Plot  $x_1(t)$  on the graph paper below.



(b) Let  $h_1(t) = h(t) [\exp(-(t-1)) u(t-1)]$   
Plot  $h_1(t)$  in the left side graph below.

(c) Find  $x_1(t) * h_1(t)$  and plot the function in the graph below for  $0 < t < 5$  in the right side graph below.



Left side

Right side